


Architectural Design 1

Name _____


Design a house in this 10 by 10 grid using the following guidelines. Label each room. Then complete the chart.

	Fraction	Decimal	Percent
Living room	_____	_____	35%
Kitchen	_____	_____	27%
Bedroom	_____	_____	20%
Bathroom	_____	_____	18%
Total:	_____	_____	_____



Design a house in this 10 by 10 grid using the following guidelines. Label each room. Then complete the chart.


	Fraction	Decimal	Percent
Living room	_____	.3	_____
Kitchen	_____	.26	_____
Bedroom	_____	_____	_____
Bathroom	_____	.16	_____
Total:	_____	1.00	_____



Architectural Design 2 Name _____

Design a house in this 10 by 10 grid using the following guidelines. Label each room. Then complete the chart.


	Fraction	Decimal	Percent
Living room	$\frac{2}{5}$	_____	_____
Kitchen	$\frac{1}{5}$	_____	_____
Bedroom	$\frac{3}{10}$	_____	_____
Bathroom	$\frac{1}{10}$	_____	_____



Total: _____

Design a house in this 10 by 10 grid using the following guidelines. Label each room. Then complete the chart.

	Fraction	Decimal	Percent
Living room	_____	.35	_____
Kitchen	$\frac{1}{4}$	_____	_____
Bedroom	_____	_____	_____
Bathroom	_____	_____	9%




Total: _____

Architectural Design 3

Name _____


Design a house in this 10 by 10 grid using the following guidelines. Label each room. Then complete the chart.

	Fraction	Decimal	Percent
Living room	$\frac{7}{20}$	_____	_____
Kitchen	_____	.3	_____
Bedroom	_____	_____	_____
Bathroom	_____	_____	8%
Total:	_____	_____	_____



Design a house in this 10 by 10 grid using the following guidelines. Label each room. Then complete the chart.

	Fraction	Decimal	Percent
Living room	_____	.3	_____
Kitchen	$\frac{1}{3}$	_____	_____
Bedroom	_____	_____	_____
Bathroom	_____	_____	10%
Total:	_____	_____	_____




Architectural Design 4

Name _____


Design a house in this 10 by 12 grid using the following guidelines. Label each room. Then complete the chart.

	Fraction	Decimal	Percent
Living room	$\frac{1}{3}$	_____	_____
Kitchen	$\frac{1}{8}$	_____	_____
Dining room	$\frac{5}{24}$	_____	_____
Bedroom	$\frac{7}{30}$	_____	_____
Bathroom	$\frac{1}{10}$	_____	_____
Total:	_____	_____	_____



Design a house in this 10 by 12 grid using the following guidelines. Label each room. Then complete the chart.

	Fraction	Decimal	Percent
Living room	$\frac{11}{30}$	_____	_____
Kitchen	_____	.2	_____
Bedroom 1	$\frac{1}{6}$	_____	_____
Bedroom 2	_____	_____	$16\frac{2}{3}\%$
Bathroom	_____	_____	_____
Total:	_____	1	_____




Architectural Design B

Name _____


Design a house in this 10 by 12 grid using the following guidelines. Label each room. Then complete the chart.

	Fraction	Decimal	Percent
Living room	_____	_____	_____
Kitchen	_____	_____	_____
Dining room	_____	_____	_____
Bedroom	_____	_____	_____
Bathroom	_____	_____	_____
Total:	_____	_____	_____



Design a house in this 10 by 12 grid using the following guidelines. Label each room. Then complete the chart.


	Fraction	Decimal	Percent
Living room	_____	_____	_____
Kitchen	_____	_____	_____
Bedroom 1	_____	_____	_____
Bedroom 2	_____	_____	_____
Bathroom	_____	_____	_____
Total:	_____	_____	_____



Architectural Design A Name _____

Design a house in this 10 by 10 grid using the following guidelines. Label each room. Then complete the chart.

	Fraction	Decimal	Percent
Living room	_____	_____	_____
Kitchen	_____	_____	_____
Bedroom	_____	_____	_____
Bathroom	_____	_____	_____
Total:	_____	_____	_____



Design a house in this 10 by 10 grid using the following guidelines. Label each room. Then complete the chart.

	Fraction	Decimal	Percent
Living room	_____	_____	_____
Kitchen	_____	_____	_____
Bedroom	_____	_____	_____
Bathroom	_____	_____	_____
Total:	_____	_____	_____

